



UNIVERSITY OF CAMBRIDGE INTERNATIONAL EXAMINATIONS
General Certificate of Education Ordinary Level

GEOGRAPHY

2217/22

Paper 2

May/June 2010

INSERT

2 hours 15 minutes

READ THESE INSTRUCTIONS FIRST

This Insert contains Photographs A and B for Question 3, Fig. 7 for Question 7 and Figs 11, 12 and 13 for Question 8.

The Insert is **not** required by the Examiner.

This document consists of **6** printed pages and **2** blank pages.



Photograph A for Question 3



Photograph B for Question 3



Fig. 7 for Question 7
Resident Questionnaire

Questionnaire

Resident Number 6

Age group	Under 15	<input type="checkbox"/>	15 - 30	<input type="checkbox"/>
	31 - 60	<input checked="" type="checkbox"/>	Over 60	<input type="checkbox"/>
Gender	Male	<input checked="" type="checkbox"/>	Female	<input type="checkbox"/>

Question 1

Why did you move to the city?

To get a job with a good wage

Question 2

What is your job or occupation?

Shop owner

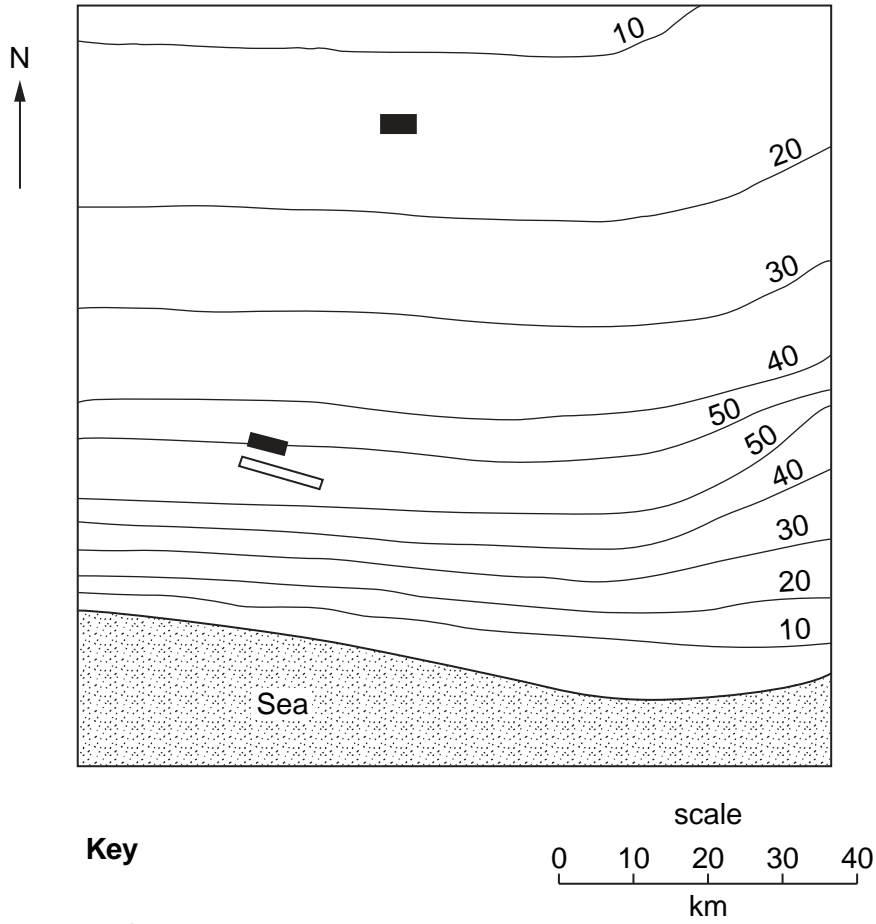
Question 3

How much do you earn in one year?

Less than 20 000 rupees	<input type="checkbox"/>
20 000 - 50 000 rupees	<input checked="" type="checkbox"/>
More than 50 000 rupees	<input type="checkbox"/>

Fig. 11 for Question 8

Sketch map to show location of school and airport



Key

20 Contour lines (metres)

■ School

▭ Airport

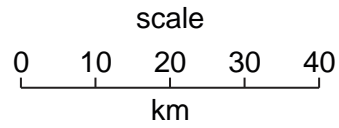


Fig. 12 for Question 8

Rain gauge

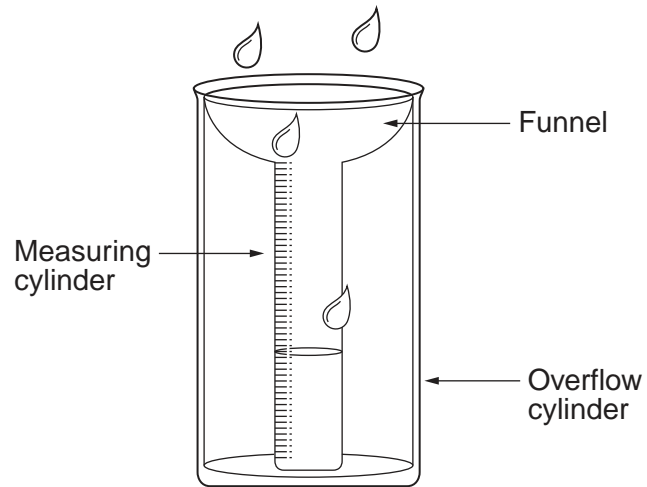


Fig. 13 for Question 8

Wind vane

